



**ELITE** [ Affiliated to CBSE ]  
**INTERNATIONAL**  
**SCHOOL**  
 2<sup>nd</sup> Pusta, Sonia Vihar, Delhi

# Winter Holiday

## HOME WORK (2023-24)

- *Enjoy your Winter Holidays .....*
- *Make your Winter Vacation wonderful & Creative through activities.*
- *Do your Holidays Home Work neat & clean and in a proper way in all subjects.*
- *Revise your whole syllabus done in class.*
- *Submit your Holidays Home Work after holidays.*
- *Try to Learn more through activities.*
- *Holidays Home Work is available on 'UOLO App' and school website - [www.eliteinternationalschool.org](http://www.eliteinternationalschool.org)*

**CLASS : L.K.G.**

Student's Name .....

Section ..... Roll No. ....

Father's Name .....

Mother's Name .....

Address .....

Contact No. ....



ENGLISH CLASS-L.K.G

Q1 Use of A/An (write and learn it)

Apple

Ball

Umbrella

Mango

Ice cream

Kite

Q3 Write any 5 vegetables name

①

②

③

④

⑤

Q4 Write any 5 Fruits name.

①


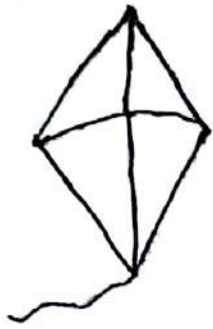
②

③


④

⑤

# Q4 Use of This and That




is a kite



is a balloon



is an egg




is a jug



is an ice-cream



is a mango



प्र०। चित्र देखकर शब्द लिखो

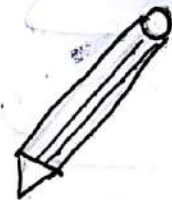
Blank writing lines for the first row.



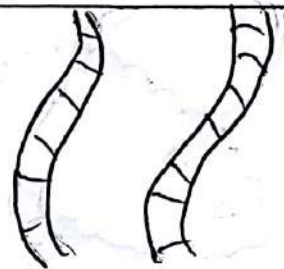
Blank writing lines for the second row.




Blank writing lines for the third row.



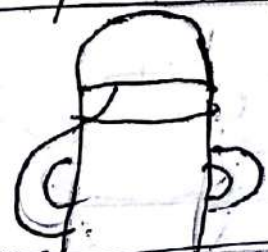
Blank writing lines for the fourth row.



Blank writing lines for the fifth row.



Blank writing lines for the sixth row.



प्र०२ शब्द पूरे करो।

क रत

खट ल


वरत

रदन

श पा

श थ


प्र०३ चित्र का शब्द सँ मिलान करो।




शहद



बतरव



कटे हल



कप

प्र०५ पाँच सब्जियों के नाम लिखो।

# MATHS CLASS-L.K.G

Q1 Fill in the blanks with  $>$ ,  $<$  or  $=$

$7 \quad \underline{\quad} \quad 9$

$8 \quad \underline{\quad} \quad 6$

$2 \quad \underline{\quad} \quad 2$

$12 \quad \underline{\quad} \quad 14$

$23 \quad \underline{\quad} \quad 12$

$9 \quad \underline{\quad} \quad 9$

$35 \quad \underline{\quad} \quad 35$

$42 \quad \underline{\quad} \quad 40$

$61 \quad \underline{\quad} \quad 64$

$55 \quad \underline{\quad} \quad 50$

Q2 Addition

$$\begin{array}{r} 1 \\ + 1 \\ \hline \end{array}$$

$$\begin{array}{r} 2 \\ + 3 \\ \hline \end{array}$$

$$\begin{array}{r} 4 \\ + 1 \\ \hline \end{array}$$

$$\begin{array}{r} 2 \\ + 2 \\ \hline \end{array}$$

$$\begin{array}{r} 3 \\ + 1 \\ \hline \end{array}$$

$$\begin{array}{r} 4 \\ + 2 \\ \hline \end{array}$$



Q3 write the numbers name.

5 -

9 -

12 -

16 -

20 -

21 -

25 -

32 -

36 -

40 -


Q4 Write the table 3 and 4

3	x	1	=	
3	x	2	=	
3	x	3	=	
3	x	4	=	
3	x	5	=	
3	x	6	=	
3	x	7	=	
3	x	8	=	
3	x	9	=	
3	x	10	=	

4	x	1	=	
4	x	2	=	
4	x	3	=	
4	x	4	=	
4	x	5	=	
4	x	6	=	
4	x	7	=	
4	x	8	=	
4	x	9	=	
4	x	10	=	

DRAWING CLASS-1:K.G

Colour the cake



Colour the mango

